

## **Pocket Count**

Sunshine State Standards




MA.D.1.2.1

Name \_\_\_\_\_

### Pocket Count

*Think carefully about the following question. Write a complete answer. You may use drawings, words, and numbers to explain your answer. Be sure to show all of your work.*

**There are 20 students in Mr. Arnett's class. On Tuesday, most of the students in the class said they had pockets in the clothes they were wearing.**



1. Which of the graphs most likely shows the number of pockets each child had?
2. Explain why you chose that graph.
3. Explain why you did not choose the other graphs.