

Math Grades 6 – 9

Reading Level: 9.5

MA.6.A.3.2

MA.8.A.4.2

MA .912.A.3.4

MA .912.A.3.5


Sense and Sensibility

Chapter XVII

Jane Austen

Activity:

1. In chapter XVII, Marianne said, “About eighteen hundred or two thousand a year; not more than *that*.” Using A for the amount of income, write an inequality that represents an income of no more than \$2,000. Graph on a number line.





According to your graph, what is the least amount of money that can be earned? Did you include negative numbers in your solution? Why or why not?

Solve and graph the following inequalities.

2.

3.



4.

5.

